

07.01.19



Spellings	Practise the word using the Look, Say, Cover, Write and Check. Then, in the space below, write a sentence containing an expanded noun phrase . E.g. The beautiful, elegant horse galloped along the moonlight path.
aloud	
allowed	
cereal	
serial	
discussed	
disgust	
hole	
whole	
hoarse	
horse	
idol	
idle	

hour	
our	
are	

Rule: Homophones/ near homophones

Homework:

Maths- complete the sheet.

Reading - carefully read the text given to you and complete the reading comprehension. Don't forget to log on to Read Theory to increase your knowledge points.

07.01.19

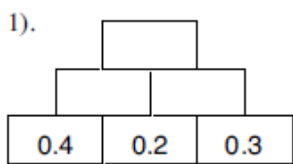
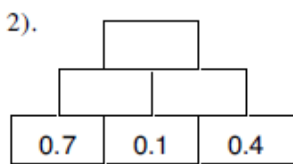
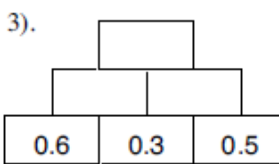
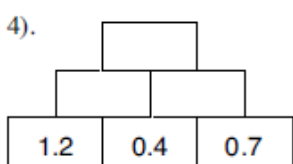
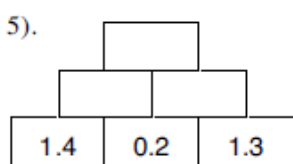
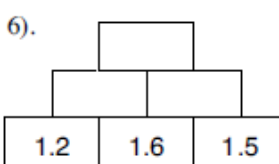
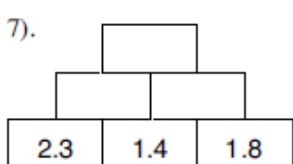
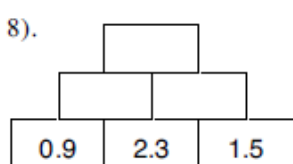
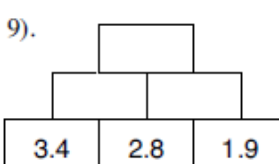
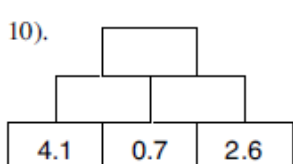
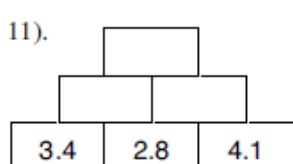
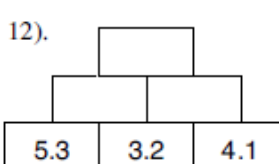
Mrs Silman and Miss Clay's group

Maths Homework: Decimals

Order the following smallest to largest:

- | | |
|-----------------------------|-----------------------------|
| 1). 2.5, 2.7, 2.1, 2.9, 2.6 | 2). 4.7, 4.2, 4.9, 4.1, 4.5 |
| 3). 7.6, 7.3, 7.9, 7.1, 7.0 | 4). 0.9, 0.3, 0.2, 0.7, 0.4 |
| 5). 3.9, 4.2, 3.7, 3.5, 4.1 | 6). 1.4, 0.9, 1.8, 0.5, 1.2 |
| 7). 8.9, 7.3, 7.9, 8.0, 8.4 | 8). 5.7, 3.9, 6.1, 4.4, 1.8 |
| 9). 0.9, 2.2, 1.7, 3.1, 5.0 | 10). 7.1, 0.3, 5.5, 6, 3.2 |

To find the missing number, add the decimal numbers in the two bricks below.

1). 	2). 	3). 
4). 	5). 	6). 
7). 	8). 	9). 
10). 	11). 	12). 

Answer the word problems:




- 1). Billy goes to visit his Gran. She gives him £2.75, Grandad then gives him £4.60. How much does he get all together ?
- 2). Sally measures two parts of a wall. One part is 4.6 m, the other part is 3.71 m. What is the total length of the wall ?
- 3). Jenny has £4.36 and spends £ 2.18 at the Newsagents. How much does she have left ?
- 4). Bill has a plank of wood 4.63 metres long. He cuts off a length 1.72 metres. How long is the other piece of wood ?

07.01.19


Mrs Thomas'

group


























Maths Homework: Decimals

If this is 1 unit  then this is 1 **tenth** or 0.1  and this is 1 **hundredth** or 0.01 .

This would then represent 6 **tenths** and one **hundredth** or 0.61.




1). For each of the following 1 unit diagrams, write in the decimal that it represents.


 _____	 _____	 _____	 _____	 _____
				
 _____	 _____	 _____	 _____	 _____
				
 _____	 _____	 _____	 _____	 _____

2). Shade in the following diagrams to represent the decimal above it.


0.43




0.24




0.09




0.2




0.91




0.79




0.02



0.7



0.16



0.87

