



Year 6 SATs 2023 Presentation
for Parents, Carers & Guardians

What are the SATs?

- SATs are the Standardised Assessment Tests that are given to children at the end of Key Stage 2.
- The SATs take place over four days, starting on **Tuesday 9th May** ending on **Friday 12th May**. Monday 8th May is a bank holiday this year.
- The SATs papers consist of:
 - Grammar, punctuation and spelling (paper 1: GPS) – Tuesday 9th May
 - Grammar, punctuation and spelling (paper 2: Spelling) – Tuesday 9th May
 - Reading – Wednesday 10th May
 - Maths (paper 1: Arithmetic) – Thursday 11th May
 - Maths (paper 2: Reasoning) – Thursday 11th May
 - Maths (paper 3: Reasoning) – Friday 12th May
- Writing is assessed using evidence collected throughout Year 6. There is no Year 6 SATs writing test.

The key stage 2 tests will be taken on set dates unless your child is absent, in which case they may be able to take them up to 5 school days afterwards.



When and how the SATs are completed

- The tests take place during normal school hours, under exam conditions.
- Children are not allowed to talk to each other from the moment the assessments are handed out until they are collected at the end of the test.
- After the tests are completed, the papers are sent away to be marked **externally**.
- The results are then sent to the school in July.
- Each test lasts no longer than 60 minutes:
 - Spelling, punctuation and grammar (paper 1: Grammar/ Punctuation) – 45 minutes
 - Spelling, punctuation and grammar (paper 2: Spelling) – 15 minutes
 - Reading – 60 minutes
 - Maths (paper 1: Arithmetic) – 30 minutes
 - Maths (paper 2: Reasoning) – 40 minutes
 - Maths (paper 3: Reasoning) – 40 minutes



Specific arrangements for SATs

Children with additional needs (who have similar support as part of day-to-day learning in school) may be allotted specific arrangements, including:

- Additional (extra) time;
- Tests being opened early to be modified;
- An adult to scribe (write) for them;
- An adult to read for them (including a translator);
- The use of prompts or rest breaks;
- Arrangements for children who are ill or injured at the time of the tests.

Pupils with an EHCP are automatically allowed up to 25% additional time (except for the spelling paper, which is not strictly timed). Pupils who use the modified large print or braille versions of the tests are automatically allowed up to 100% additional time.



The results

Tests are marked externally. Once marked, the tests will be given the following scores:

- A raw score (total number of marks achieved for each paper);
- A scaled score (see below);
- A judgement on if the National Standard has been met.

After marking each test, the external marker will convert the raw score to a scaled score. Even though the tests are made to the same standard each year, the questions must be different. This means the difficulty of the tests may vary. Scaled scores ensures an accurate comparison of performance over time.

Scaled scores range from 80 to 120.

A scaled score of 100 or more shows the pupil is meeting the National Standard.



Grammar, Punctuation and Spelling: Tuesday 9th May

Grammar, punctuation and spelling consists of two papers.

- Paper 1 focuses on all three elements (grammar, punctuation and spelling or GPS). The paper lasts for **45 minutes**.
- Paper 2 consists of a spelling test only. It should take approximately **15 minutes**, although this is not a set amount of time (pupils should be given as much time as they need to complete the test).



Grammar, Punctuation and Spelling: Paper 1 (GPS)

The children have been working hard to develop and secure their knowledge of the technical vocabulary needed in this test.

This test focuses on:

- Grammatical terms/ word classes;
- Functions of sentences;
- Combining words, phrases and clauses;
- Verb forms, tenses and consistency;
- Punctuation;
- Vocabulary;
- Standard English and formality.

This test requires a range of answer types but does not require longer formal answers.



Grammar, Punctuation and Spelling: Paper 1 (GPS)

Example questions:

4

Which sentence must end with a **question mark**?

Tick one.

Shall we go round the fitness trail in the park

We could go tomorrow if you like

What I really like is the rope bridge

Let me know what you would like to do

1 mark

37

Complete the sentence below with an appropriate **subordinating conjunction**.

e.g. **Although, While**
_____ it rained all afternoon, the picnic was a success.

1 mark

32

The teacher wants to write a sign to remind children to turn the lights off.

Write the **command** that the teacher might use on the sign.
Remember to punctuate your answer correctly.

e.g. Switch off the lights! Please turn off the lights

1 mark



Grammar, Punctuation and Spelling: Paper 2 (spelling)

Paper 2 is a shorter paper that focuses solely on spellings.

Example questions:

Spelling

1. The children were _____ the objects from smallest to largest.
2. Do not show _____ to anyone.
3. I was given a _____ award.

2022 Spelling script

Spelling 1: The word is **ordering**.

The children were **ordering** the objects from smallest to largest.

The word is **ordering**.

Spelling 2: The word is **disrespect**.

Do not show **disrespect** to anyone.

The word is **disrespect**.

Spelling 3: The word is **special**.

I was given a **special** award.

The word is **special**.



Reading: Wednesday 10th May

There is one reading test that lasts for **60 minutes**.

The test is designed to measure if the children's comprehension of age-appropriate reading material meets the national standard. There are three different set texts for children to read. These could be any combination of **non-fiction, fiction and/ or poetry**.

The test covers the following areas (known as Content Domains):

- Give/ explain the meaning of words in context;
- Retrieve and record information/ identify key details from fiction and non-fiction;
- Summarise main ideas from more than one paragraph;
- Make inferences from the text/ explain and justify inferences with evidence from the text;
- Predict what might happen from details stated and implied;
- Identify/ explain how information/ narrative content is related and contributes to meaning as a whole;
- Identify/ explain how meaning is enhanced through choice of words and phrases;
- Make comparisons within the text.



Reading

The reading SATs paper requires a range of answer styles.

Example questions:

Questions 1–11 are about *The Parsnips* (pages 4–6)

1 Veronika's football team has two names.

What are the **two** names?

1. _____

2. _____

THE CLUB – THE FACTS

Name: Parrs Under 11s, also known as "The Parsnips"

Capacity: 500

Sponsor: Sweet Peas Garden Centre, Mowborough

Ground: Lornton FC, Low Road, Lornton

Plays in: The Nettie Honeyball Women's League

Coach: Hannah Preston

Assistant coach: Katie Regan

Qu.	Requirement	Mark
1	<p>Veronika's football team has two names.</p> <p>What are the two names?</p> <p>Content domain: 2b – retrieve and record information or identify key details from fiction and non-fiction</p> <p>Award 1 mark for reference to Parrs Under 11s and The Parsnips, e.g.</p> <ul style="list-style-type: none">• <i>The Parsnips</i>• <i>Parsnips</i>• <i>Parrs under 11s</i>• <i>Parrs</i>.	1m

Reading

Example questions: Based on the whole text

33 Think about the whole text.

What impressions do you get of Penelope as she describes her unusual experience?

Give **two** impressions, using evidence from the text to support your answer.

1. _____

2. _____

3 marks

Qu.	Requirement	Mark
33	<p>Think about the whole text.</p> <p>What impressions do you get of Penelope as she describes her unusual experience?</p> <p>Give two impressions, using evidence from the text to support your answer.</p> <p>Content domain: 2d – make inferences from the text or explain and justify inferences with evidence from the text</p> <p>Acceptable points:</p> <ol style="list-style-type: none">1. curious2. imaginative3. confused4. unafraid5. solitary / content with her own company6. observant <p>Award 3 marks for two acceptable points, at least one with evidence, e.g.</p> <ul style="list-style-type: none">• 1. <i>She has a big imagination because she thinks that she is in a forest when she is sitting in the stairway.</i> [AP2 + evidence]• 2. <i>That she is good at noticing things that go on.</i> [AP6]• 1. <i>I think she is just a curious girl who wants to know everything that is going on.</i> [AP1]• 2. <i>She is very confused. 'I never felt them touch me and this gave me a curious sensation.'</i> [AP3 + evidence] <p>Award 2 marks for either two acceptable points, or one acceptable point with evidence, e.g.</p> <ul style="list-style-type: none">• 1. <i>Brave because she did the right thing in the situation.</i> [AP4]• 2. <i>She was a person who definitely kept herself to herself.</i> [AP5]• 1. <i>She is not afraid. 'Ran downstairs and pushed open the door... expecting to see her.'</i> [AP4 + evidence] <p>Award 1 mark for one acceptable point, e.g.</p> <ul style="list-style-type: none">• 1. <i>She likes to find out about other people.</i> [AP1]	Up to 3m



Reading

Since the current testing formation for the SATs began in 2016, there has been a tendency for three types of questions to be the most popular.

In the 2022 Reading SATs paper,

- 10% of marks could be gained from answering questions involving giving and explaining the meaning of words in context;
- 38% of marks could be gained from answering questions involving retrieving and recording information or identifying key details from a text;
- 44% of marks could be gained from answering questions involving making inferences from a text and justifying inferences with text evidence.

When reading with your child at home try focusing on these types of questions.



Maths: Thursday 11th May and Friday 12th May

The maths assessments consist of three tests.

- Paper 1: Arithmetic (30 minutes) – Thursday 11th May
- Paper 2: Reasoning (40 minutes) – Thursday 11th May
- Paper 3: Reasoning (40 minutes) – Friday 12th May



Maths Paper 1 (Arithmetic)

The maths arithmetic paper has a total of **40 marks** and lasts for **30 minutes**.

The test covers the four operations (addition, subtraction, multiplication, division, including order of operations requiring BIDMAS), percentages of amounts and calculating with decimals and fractions.

Example questions:

32	$2\frac{1}{2} - \frac{2}{3} =$		<input type="text"/> 1 mark
-----------	--------------------------------	--	--------------------------------

33	$\begin{array}{r} 4078 \\ \times \quad 67 \\ \hline \end{array}$		<input type="text"/> 2 marks
	Show your method		

Qu.	Requirement	Mark	Additional guidance
32	$1\frac{5}{6}$ OR $\frac{11}{6}$	1m	Accept equivalent mixed numbers, fractions or an exact decimal equivalent, e.g. 1.8 $\bar{3}$ (accept any unambiguous indication of the recurring digits). Do not accept rounded or truncated decimals.
33	Award TWO marks for the correct answer of 273,226 If the answer is incorrect, award ONE mark for a formal method of long multiplication with no more than ONE arithmetic error, e.g. <ul style="list-style-type: none"> • $\begin{array}{r} 4078 \\ \times \quad 67 \\ \hline 28546 \\ 244680 \\ \hline 273126 \text{ (error)} \end{array}$ OR • $\begin{array}{r} 4078 \\ \times \quad 67 \\ \hline 28544 \text{ (error)} \\ 244680 \\ \hline 273224 \end{array}$ 	Up to 2m	Working must be carried through to reach a final answer for the award of ONE mark. Do not award any marks if the error is in the place value, e.g. the omission of the zero when multiplying by tens: $\begin{array}{r} 4078 \\ \times \quad 67 \\ \hline 28546 \\ 24468 \text{ (place value error)} \\ \hline 53014 \end{array}$



Maths Paper 1 (Arithmetic)

Example 1 mark questions:

6 $6.48 + 8.6 =$

$$\begin{array}{r} 6.48 \\ + 8.6 \\ \hline 15.08 \\ \end{array}$$

1 mark

15 = 596×7

$$\begin{array}{r} 596 \\ \times 7 \\ \hline 4172 \\ \end{array}$$

1 mark

27 15% of 3,200 =

$$\begin{array}{l} 10\% \text{ of } 3,200 = 320 \\ 5\% \text{ of } 3,200 = 160 \\ 15\% \text{ of } 3,200 = 480 \end{array}$$

1 mark

35 $6 + 4 \div 2 =$

$$\begin{array}{l} 4 \div 2 = 2 \\ 6 + 2 = 8 \end{array}$$

1 mark



Maths Papers 2 and 3 (Reasoning)

Paper 2 will take place on Thursday 11th May and paper 3 will take place on Friday 12th May. These tests have a total of 35 marks each and lasts for 40 minutes each.

These papers require children to demonstrate their mathematical knowledge and skills, as well as their ability to solve problems and their mathematical reasoning. They cover a wide range of mathematical topics from key stage 2 including,

- Number and place value (including Roman numerals);
- The four operations;
- Geometry (properties of shape, position and direction);
- Statistics;
- Measurement (length, perimeter, mass, volume, time, money);
- Algebra;
- Ratio and proportion;
- Fractions, decimals and percentages.



Maths Papers 2 (Reasoning)

Example questions:

6 Emma has a 5 litre bag of compost.



She uses 2.75 litres.

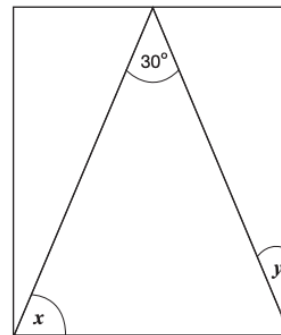
How much compost does Emma have left?

2.25 litres

1 mark

24

Here is an **isosceles** triangle inside a rectangle.



Not to scale

Calculate the sizes of angles x and y .

Show your method

$x =$ °

$y =$ °

2 marks



Maths Papers 3 (Reasoning)

Example question:

20

This table shows how many people finished the New York Marathon in each of the first four decades it was held.

New York Marathon	
Decade	Total number of people who finished
1st decade	24,863
2nd decade	170,932
3rd decade	282,420
4th decade	350,824

What is the mean number of people who finished the marathon per decade? Round your answer to the **nearest hundred**.

Show your method

people

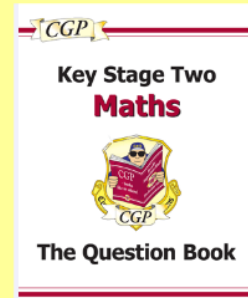
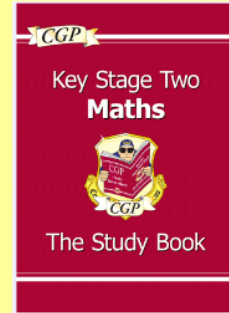
3 marks

Qu.	Requirement	Mark	Additional guidance
20	<p>Award THREE marks for the correct answer of 207,300</p> <p>If the answer is incorrect, award TWO marks for:</p> <ul style="list-style-type: none"> evidence of an appropriate complete method which contains no more than one error, e.g. $\begin{array}{r} 24,863 \\ 170,932 \\ 282,420 \\ + 350,824 \\ \hline 828,939 \text{ (error)} \end{array}$ $828,939 \div 4 = 207,234 \text{ r}3$ Rounded to the nearest hundred = 207,200 <p>OR</p> <ul style="list-style-type: none"> sight of $207,259 \text{ r}3$ OR $207,259 \frac{3}{4}$ OR 207,259.75 <p>Award ONE mark for:</p> <ul style="list-style-type: none"> evidence of an appropriate method with more than one error. 	Up to 3m	<p>Answer need not be obtained or rounded for the award of ONE mark.</p> <p>A misread of a number may affect the award of marks. No marks are awarded if there is more than one misread or if the mathematics is simplified.</p> <p>TWO marks will be awarded if an appropriate method with the misread number is followed through correctly.</p> <p>ONE mark will be awarded for evidence of an appropriate method with the misread number followed through correctly with no more than one error.</p>



What else can you do to help?


- First and foremost, support and reassure your child that there is nothing to worry about and they should always just try their best. Praise and encourage!
- Ensure your child has the best possible attendance at school.
- Support your child with any homework tasks.
- Reading, spelling and arithmetic (e.g. times tables) are always good to practise to build resilience and stamina.
- Talk to your child about what they have learnt at school and what book(s) they are reading (the character, the plot, their opinion).
- Make sure your child has a good sleep and healthy breakfast every morning.



Breakfast Club

All children are invited to attend a free breakfast club during SATs week, from 8:15am.

Please sign and return the completed permission form given to your child (this will be handed out after the Easter break).



Things to remember about SATs

SATs focus on what children know about Maths and English.

They will not reflect how talented they are at science, geography, art, PE..., and they certainly won't highlight all of their amazing personal characteristics.

SATs don't tell the whole story.

Their results will say if they did or did not meet a certain standard but not necessarily by what margin. These thresholds change each year according to the overall national performance, so what was classed as 'meeting the expected standard' this year might not be the same as last year. Your school may be able to provide you with more detailed feedback.

SATs are only four days out of a whole Primary School career.

In reality, there's one or two papers each day that last 30 to 60 minutes.



Advice for Year 6 children

- Listen to your teacher.
- The adults you work with all want you to do your best.
- Get plenty of sleep and eat well, this will help your brain.
- Read all the questions carefully. This can help you to avoid silly mistakes.
- Don't panic. There may be questions you think you can't answer. Take a deep breath. Read it again. You can always move on and go back to it later. It's often better to write something rather than nothing.
- Remember that the Year 6 SATs last for 4 days out of your whole life!

Any questions?

